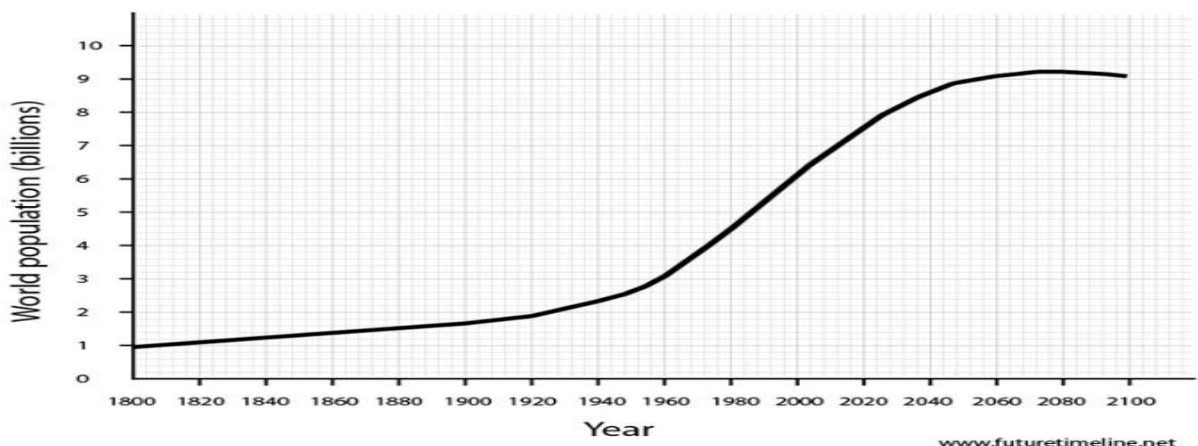


IGCSE Geography – Population Growth & Distribution

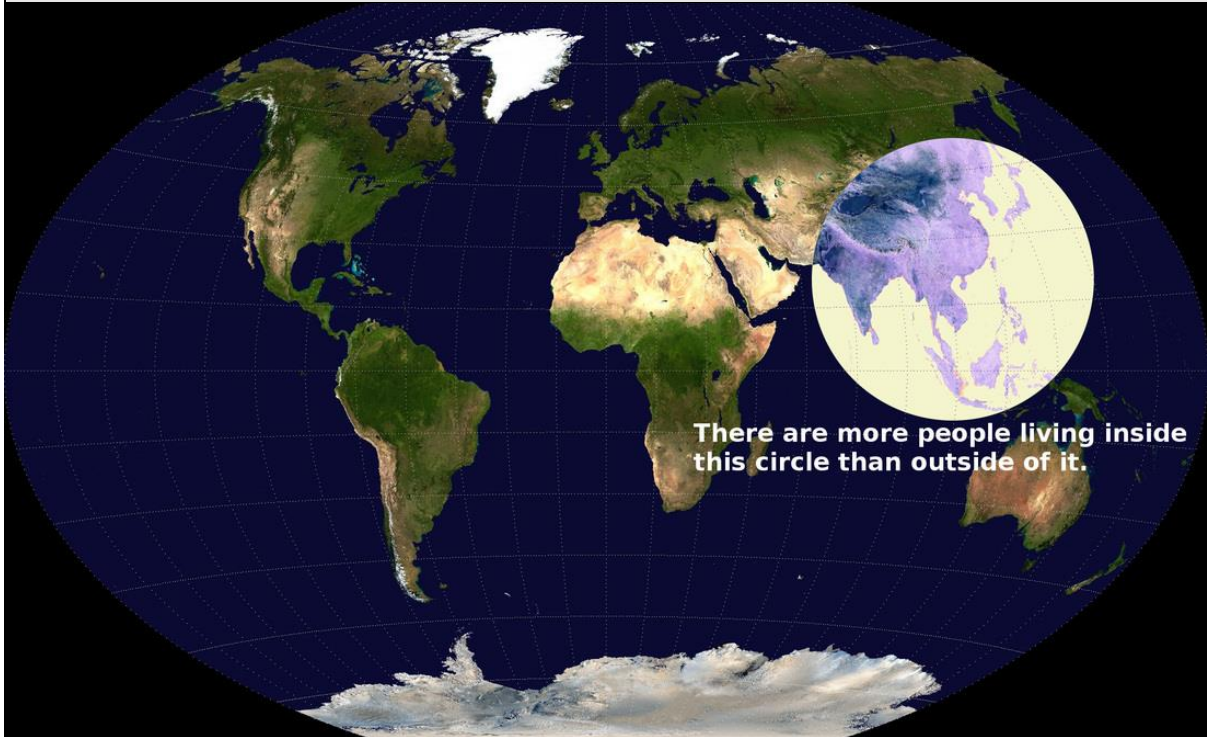


Task 1 – Using Geographypods, note down the five reasons why the population growth rate has started to slow.

- 1
- 2
- 3
- 4
- 5



Task 2 – Study the graphic below and the figures from geographypods. In the space underneath, explain which are the three most populous countries in this circle and the implications that this has for population growth.



Blank space for student response to Task 2.

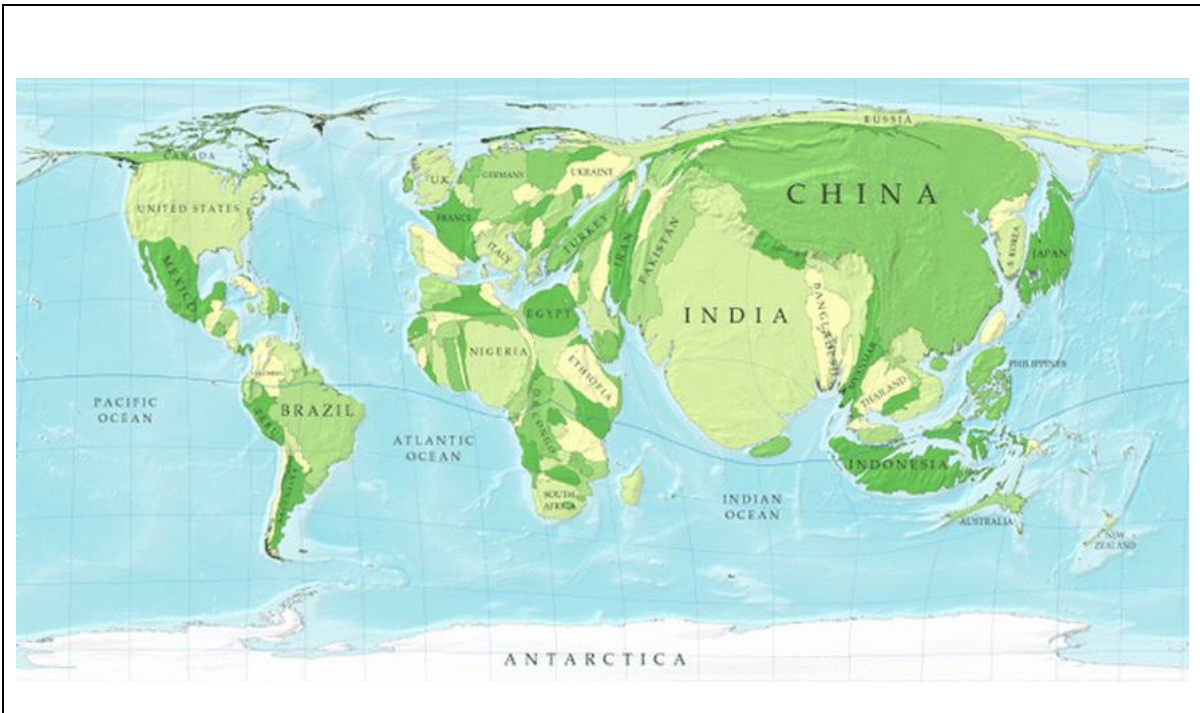
Task 3 - Define Population Distribution

Blank space for student response to Task 3.

Task 4 - Define Population Density

Blank space for student response to Task 4.

Your name here



Task 5 - Write a detailed description of the spatial distribution of the world's most populous countries. Try to identify countries that have swelled hugely and those that have almost disappeared. Name your home country and describe its new shape.

Task 6 – Using the data from the link on geographypods, describe the factors influencing the density and distribution of population. You should make reference to the following points (and annotate an example on the map on the next page):

- 1. Availability of water**
- 2. Communications**
- 3. Proximity to coastline**
- 4. Movement of populations to urban areas**
- 5. Avoidance of extreme climatic conditions**

